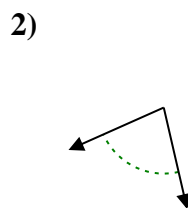
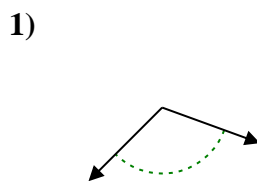
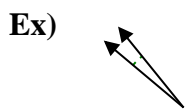




Determine if the angle shown is acute, obtuse, right or straight.

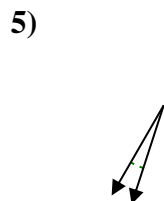
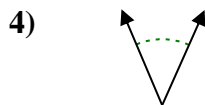
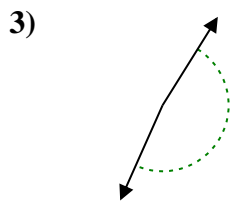
Answers



Ex. acute

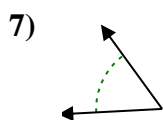
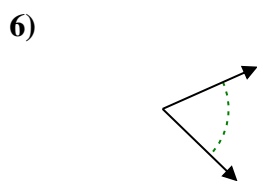
1. _____

2. _____



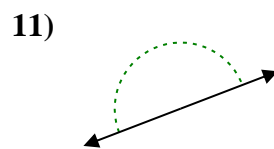
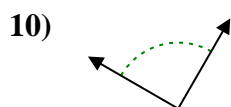
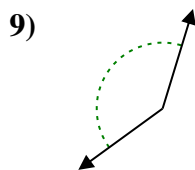
3. _____

4. _____



6. _____

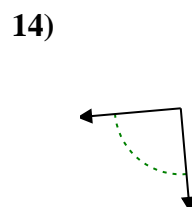
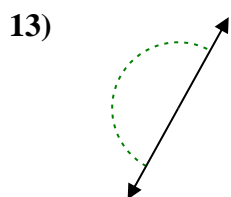
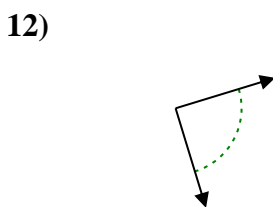
7. _____



9. _____

10. _____

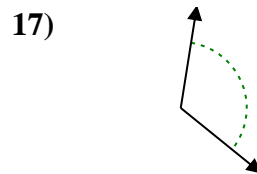
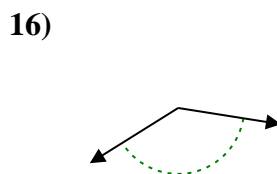
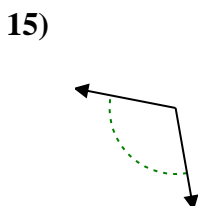
11. _____



12. _____

13. _____

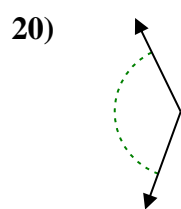
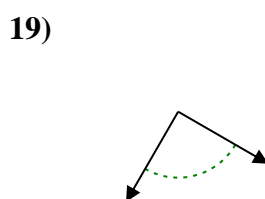
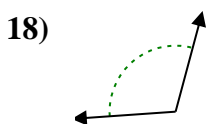
14. _____



15. _____

16. _____

17. _____



18. _____

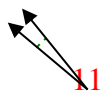
19. _____

20. _____

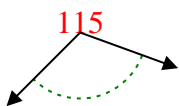


Determine if the angle shown is acute, obtuse, right or straight.

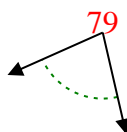
Ex)



1)



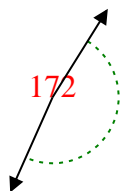
2)



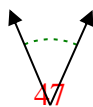
Answers

Ex. **acute**

3)



4)



5)



1. **obtuse**

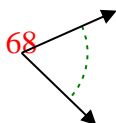
2. **acute**

3. **obtuse**

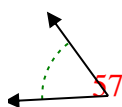
4. **acute**

5. **acute**

6)



7)



8)



6. **acute**

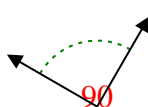
7. **acute**

8. **acute**

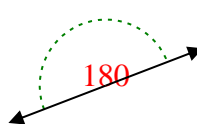
9)



10)



11)

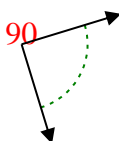


9. **obtuse**

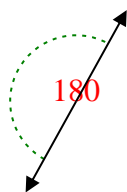
10. **right**

11. **straight**

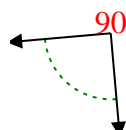
12)



13)



14)

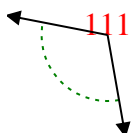


12. **right**

13. **straight**

14. **right**

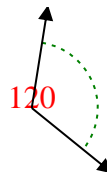
15)



16)



17)

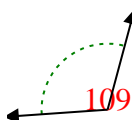


15. **obtuse**

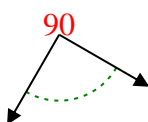
16. **obtuse**

17. **obtuse**

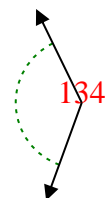
18)



19)



20)



18. **obtuse**

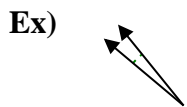
19. **right**

20. **obtuse**

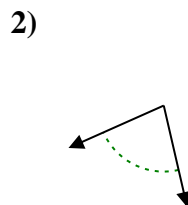
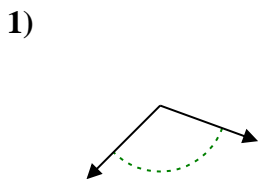


Determine if the angle shown is acute, obtuse, right or straight.

Answers

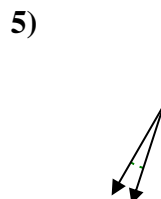
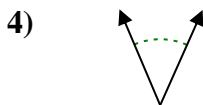
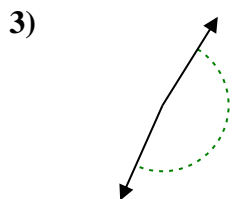


Ex. acute



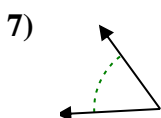
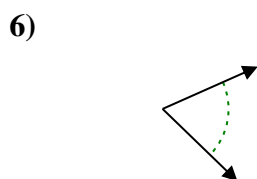
1. _____

2. _____



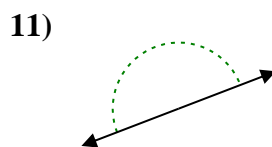
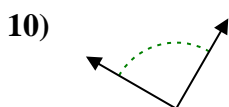
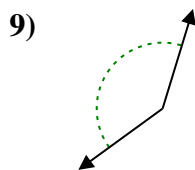
3. _____

4. _____



6. _____

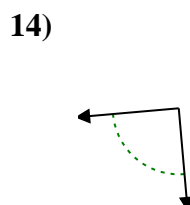
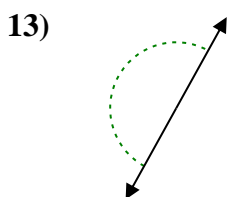
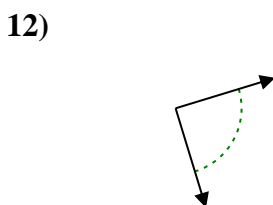
7. _____



9. _____

10. _____

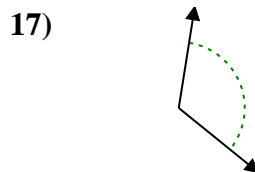
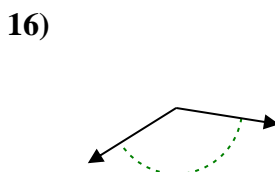
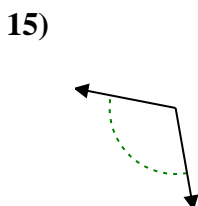
11. _____



12. _____

13. _____

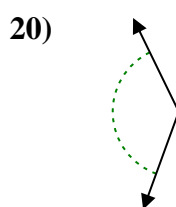
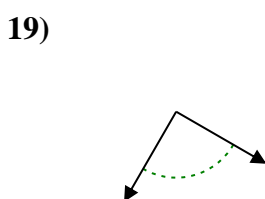
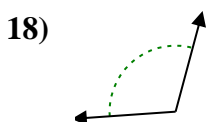
14. _____



15. _____

16. _____

17. _____



18. _____

19. _____

20. _____